


The slide features a dark blue background with decorative geometric patterns on the left and right sides. These patterns consist of overlapping, colorful shapes in shades of yellow, magenta, cyan, and grey, arranged in a zig-zag or chevron-like fashion. The text 'Word Problems' is centered on the slide in a white, rounded, sans-serif font.

Word

Problems

C.U.B.E.S



Circle the numbers.

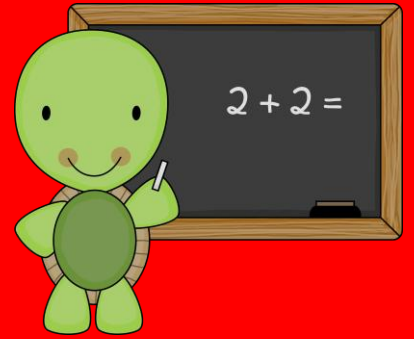
A decorative graphic in the top right corner consisting of several overlapping, colorful arrow shapes pointing to the left. The colors include magenta, yellow, and light blue.

U

A decorative graphic in the bottom left corner consisting of several overlapping, colorful arrow shapes pointing to the right. The colors include magenta, yellow, and light blue.

Underline the question.

Ask:



What am I trying to find out?

How many _____?



Box the action word and
write the sign.

These words will tell you what to do.

both plus
altogether

**Addition
Words**

in all
more
add

total
sum
join

combined
increase

minus leave difference less
remain **Subtraction** fewer
decrease **Words** less than
how much more take away



E

Evaluate what steps
to take.

Ask:



What strategies will
I use?



Solve and check.

Ask:

Does my answer make sense?



Did I check my work 3 times?



C.U.B.E.S

7 monkeys were swinging in a tree. Then some of the monkeys left. Now there are 3 monkeys swinging. How many monkeys left?

- Objects/Tools
- Picture
- Equation
- Mental Math
- Counting On
- Counting Back
- Make a 10
- Back Down Through 10
- Think Addition
- Fact
- Count All
- Doubles + 1 or 2
- Doubles - 1 or 2



C.U.B.E.S

There were 10 clouds in the sky.
Then some of them blew away.
Now there are 3 clouds.
How many clouds blew away?

- Objects/Tools
- Picture
- Equation
- Mental Math
- Counting On
- Counting Back
- Make a 10
- Back Down Through 10
- Think Addition
- Fact
- Count All
- Doubles + 1 or 2
- Doubles - 1 or 2



C.U.B.E.S

There were 6 peaches on the tree.
Then we picked some peaches.
Now there are 3 peaches left on
the tree. How many peaches did
we pick?

- Objects/Tools
- Picture
- Equation
- Mental Math
- Counting On
- Counting Back
- Make a 10
- Back Down Through 10
- Think Addition
- Fact
- Count All
- Doubles + 1 or 2
- Doubles - 1 or 2



C.U.B.E.S


There were 9 ducks in the pond.

Some ducks swam away.

Now there are 2 ducks in the pond.

How many ducks swam away?


- Objects/Tools
- Picture
- Equation
- Mental Math
- Counting On
- Counting Back
- Make a 10
- Back Down Through 10
- Think Addition
- Fact
- Count All
- Doubles + 1 or 2
- Doubles - 1 or 2



C.U.B.E.S

Ruby read 6 pages before lunch.
She read some more pages after
lunch. If Ruby read 13 pages in all,
how many pages did she read
after lunch?


- Objects/Tools
- Picture
- Equation
- Mental Math
- Counting On
- Counting Back
- Make a 10
- Back Down Through 10
- Think Addition
- Fact
- Count All
- Doubles + 1 or 2
- Doubles - 1 or 2



C.U.B.E.S

There are 10 apples in the basket.
4 apples are yellow and the rest
are red. How many apples are
red?

- Objects/Tools
- Picture
- Equation
- Mental Math
- Counting On
- Counting Back
- Make a 10
- Back Down Through 10
- Think Addition
- Fact
- Count All
- Doubles + 1 or 2
- Doubles - 1 or 2



C.U.B.E.S

There are 12 kids on the bus.
3 are boys. The rest are girls.
How many girls are on the bus?

- Objects/Tools
- Picture
- Equation
- Mental Math
- Counting On
- Counting Back
- Make a 10
- Back Down Through 10
- Think Addition
- Fact
- Count All
- Doubles + 1 or 2
- Doubles - 1 or 2




C.U.B.E.S

My mom baked 10 cookies.

My brother ate 7. I ate the rest.

How many cookies did I eat?

- Objects/Tools
- Picture
- Equation
- Mental Math
- Counting On
- Counting Back
- Make a 10
- Back Down Through 10
- Think Addition
- Fact
- Count All
- Doubles + 1 or 2
- Doubles - 1 or 2



C.U.B.E.S

I counted 15 pretty flowers.

8 were red and the rest were pink.

How many flowers were pink?

- Objects/Tools
- Picture
- Equation
- Mental Math
- Counting On
- Counting Back
- Make a 10
- Back Down Through 10
- Think Addition
- Fact
- Count All
- Doubles + 1 or 2
- Doubles - 1 or 2



C.U.B.E.S

There were 9 ducks in the pond.

Some ducks swam away.

Now there are 2 ducks in the pond.

How many ducks swam away?

- Objects/Tools
- Picture
- Equation
- Mental Math
- Counting On
- Counting Back
- Make a 10
- Back Down Through 10
- Think Addition
- Fact
- Count All
- Doubles + 1 or 2
- Doubles - 1 or 2



C.U.B.E.S

Lucy has 7 apples.

Julie has 19 apples.

How many more apples does Julie have than Lucy?

- Objects/Tools
- Picture
- Equation
- Mental Math
- Counting On
- Counting Back
- Make a 10
- Back Down Through 10
- Think Addition
- Fact
- Count All
- Doubles + 1 or 2
- Doubles - 1 or 2



C.U.B.E.S

Sam had 14 stickers.

He had 8 more stickers than Josh.

How many stickers did Josh have?

- Objects/Tools
- Picture
- Equation
- Mental Math
- Counting On
- Counting Back
- Make a 10
- Back Down Through 10
- Think Addition
- Fact
- Count All
- Doubles + 1 or 2
- Doubles - 1 or 2



C.U.B.E.S

Lily had 8 skittles.

Wade had 3 more skittles than Lily. How many skittles did Wade have?

- Objects/Tools
- Picture
- Equation
- Mental Math
- Counting On
- Counting Back
- Make a 10
- Back Down Through 10
- Think Addition
- Fact
- Count All
- Doubles + 1 or 2
- Doubles - 1 or 2



C.U.B.E.S

Sophie had 6 rocks.

Lauren had 4 rocks. How many more rocks does Sophie have than Lauren?

- Objects/Tools
- Picture
- Equation
- Mental Math
- Counting On
- Counting Back
- Make a 10
- Back Down Through 10
- Think Addition
- Fact
- Count All
- Doubles + 1 or 2
- Doubles - 1 or 2



C.U.B.E.S

Shakira has a collection of 12 rocks. 8 are purple and the rest are black. How many black rocks does Shakira have?

- Objects/Tools
- Picture
- Equation
- Mental Math
- Counting On
- Counting Back
- Make a 10
- Back Down Through 10
- Think Addition
- Fact
- Count All
- Doubles + 1 or 2
- Doubles - 1 or 2



C.U.B.E.S

Ruby has some marbles. 6 are red and 11 are green. How many marbles does Ruby have?

- Objects/Tools
- Picture
- Equation
- Mental Math
- Counting On
- Counting Back
- Make a 10
- Back Down Through 10
- Think Addition
- Fact
- Count All
- Doubles + 1 or 2
- Doubles - 1 or 2



C.U.B.E.S

Miguel had some toy cars. He gave 4 to Reyly. Now he has 5 cars. How many toy cars did he have to start with?

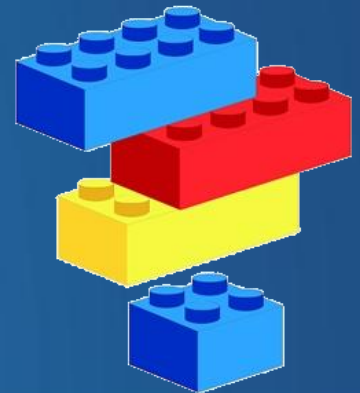
- Objects/Tools
- Picture
- Equation
- Mental Math
- Counting On
- Counting Back
- Make a 10
- Back Down Through 10
- Think Addition
- Fact
- Count All
- Doubles + 1 or 2
- Doubles - 1 or 2



C.U.B.E.S

Julien had 18 Legos. He gave some to Abe. Now he has 11 Legos. How many Legos did he give to Abe?


- Objects/Tools
- Picture
- Equation
- Mental Math
- Counting On
- Counting Back
- Make a 10
- Back Down Through 10
- Think Addition
- Fact
- Count All
- Doubles + 1 or 2
- Doubles - 1 or 2



C.U.B.E.S

Jose had 14 markers. He gave 8 to Thomas. How many markers does Jose have now?

- Objects/Tools
- Picture
- Equation
- Mental Math
- Counting On
- Counting Back
- Make a 10
- Back Down Through 10
- Think Addition
- Fact
- Count All
- Doubles + 1 or 2
- Doubles - 1 or 2



C.U.B.E.S

John bought some candy on Monday. On Tuesday he bought 4 more pieces of candy. Now he has 11 pieces of candy. How many pieces of candy did John buy on Monday?

- Objects/Tools
- Picture
- Equation
- Mental Math
- Counting On
- Counting Back
- Make a 10
- Back Down Through 10
- Think Addition
- Fact
- Count All
- Doubles + 1 or 2
- Doubles - 1 or 2



C.U.B.E.S

Jack bought 5 dinosaurs on Monday. On Tuesday he bought some more. Now he has 12 dinosaurs. How many dinosaurs did Jack buy on Tuesday?

- Objects/Tools
- Picture
- Equation
- Mental Math
- Counting On
- Counting Back
- Make a 10
- Back Down Through 10
- Think Addition
- Fact
- Count All
- Doubles + 1 or 2
- Doubles - 1 or 2



C.U.B.E.S

Kylee bought 3 dolls on Monday.
On Tuesday she bought 4 more.
How many dolls did Kylee buy?

- Objects/Tools
- Picture
- Equation
- Mental Math
- Counting On
- Counting Back
- Make a 10
- Back Down Through 10
- Think Addition
- Fact
- Count All
- Doubles + 1 or 2
- Doubles - 1 or 2



C.U.B.E.S

Mr. Smith had 8 cookies. He had 5 more than Suzy. How many cookies did Suzy have?


- Objects/Tools
- Picture
- Equation
- Mental Math
- Counting On
- Counting Back
- Make a 10
- Back Down Through 10
- Think Addition
- Fact
- Count All
- Doubles + 1 or 2
- Doubles - 1 or 2



C.U.B.E.S

Keyshawn had 3 crayons. Addy had 5 more crayons than Keyshawn. How many crayons did Addy have?

- Objects/Tools
- Picture
- Equation
- Mental Math
- Counting On
- Counting Back
- Make a 10
- Back Down Through 10
- Think Addition
- Fact
- Count All
- Doubles + 1 or 2
- Doubles - 1 or 2



C.U.B.E.S

Kenneth had 9 leaves. Aleks had 4 leaves. How many more leaves did Kenneth have than Aleks?


- Objects/Tools
- Picture
- Equation
- Mental Math
- Counting On
- Counting Back
- Make a 10
- Back Down Through 10
- Think Addition
- Fact
- Count All
- Doubles + 1 or 2
- Doubles - 1 or 2



C.U.B.E.S

Hunter had 6 red stickers and 3 purple stickers. How many stickers did Hunter have altogether?


- Objects/Tools
- Picture
- Equation
- Mental Math
- Counting On
- Counting Back
- Make a 10
- Back Down Through 10
- Think Addition
- Fact
- Count All
- Doubles + 1 or 2
- Doubles - 1 or 2



C.U.B.E.S

Ethan had 12 M&M's. 7 were brown and the rest were green. How many green M&M's did Ethan have?

- Objects/Tools
- Picture
- Equation
- Mental Math
- Counting On
- Counting Back
- Make a 10
- Back Down Through 10
- Think Addition
- Fact
- Count All
- Doubles + 1 or 2
- Doubles - 1 or 2



C.U.B.E.S

Emmely had 12 brownies. She gave 8 brownies to Annie. How many brownies did Emmely have left?


- Objects/Tools
- Picture
- Equation
- Mental Math
- Counting On
- Counting Back
- Make a 10
- Back Down Through 10
- Think Addition
- Fact
- Count All
- Doubles + 1 or 2
- Doubles - 1 or 2



C.U.B.E.S

Eliza had 19 colored pencils. She gave some to Chloe. Now she has 12 colored pencils left. How many colored pencils did she give to Chloe?

- Objects/Tools
- Picture
- Equation
- Mental Math
- Counting On
- Counting Back
- Make a 10
- Back Down Through 10
- Think Addition
- Fact
- Count All
- Doubles + 1 or 2
- Doubles - 1 or 2



C.U.B.E.S

Colby had some stamps. She gave 5 to Bennett. Then she had 8 left. How many stamps did Colby have to start with?

- Objects/Tools
- Picture
- Equation
- Mental Math
- Counting On
- Counting Back
- Make a 10
- Back Down Through 10
- Think Addition
- Fact
- Count All
- Doubles + 1 or 2
- Doubles - 1 or 2



C.U.B.E.S

Austin had some fish. His mom gave him 4 more fish. Now he has 10 fish. How many fish did his mom give him?

- Objects/Tools
- Picture
- Equation
- Mental Math
- Counting On
- Counting Back
- Make a 10
- Back Down Through 10
- Think Addition
- Fact
- Count All
- Doubles + 1 or 2
- Doubles - 1 or 2



C.U.B.E.S

Samantha had 5 apples. Jaden gave her some more. Now Samantha has 14 apples. How many apples did Jaden give her?


- Objects/Tools
- Picture
- Equation
- Mental Math
- Counting On
- Counting Back
- Make a 10
- Back Down Through 10
- Think Addition
- Fact
- Count All
- Doubles + 1 or 2
- Doubles - 1 or 2



C.U.B.E.S

Harper had 8 grapes. Gus gave her 4 more grapes. How many grapes does Harper have now?


- Objects/Tools
- Picture
- Equation
- Mental Math
- Counting On
- Counting Back
- Make a 10
- Back Down Through 10
- Think Addition
- Fact
- Count All
- Doubles + 1 or 2
- Doubles - 1 or 2



C.U.B.E.S

Lucy has 7 cherries. Julie has some cherries too. Together they have 14 cherries. How many cherries does Julie have?


- Objects/Tools
- Picture
- Equation
- Mental Math
- Counting On
- Counting Back
- Make a 10
- Back Down Through 10
- Think Addition
- Fact
- Count All
- Doubles + 1 or 2
- Doubles - 1 or 2



C.U.B.E.S

Sam hops in 14 puddles on his way to school. He hops in 20 puddles on his way home. How many puddles did Sam hop in?

- Objects/Tools
- Picture
- Equation
- Mental Math
- Counting On
- Counting Back
- Make a 10
- Back Down Through 10
- Think Addition
- Fact
- Count All
- Doubles + 1 or 2
- Doubles - 1 or 2



C.U.B.E.S

There are 40 yellow chicks and 29 white chicks. How many chicks are there?


- Objects/Tools
- Picture
- Equation
- Mental Math
- Counting On
- Counting Back
- Make a 10
- Back Down Through 10
- Think Addition
- Fact
- Count All
- Doubles + 1 or 2
- Doubles - 1 or 2



C.U.B.E.S

In the garden, Alice has 31 tulips and 60 lilacs. How many flowers does Alice have in her garden?

- Objects/Tools
- Picture
- Equation
- Mental Math
- Counting On
- Counting Back
- Make a 10
- Back Down Through 10
- Think Addition
- Fact
- Count All
- Doubles + 1 or 2
- Doubles - 1 or 2




C.U.B.E.S

Lucy bought 19 bags of red mulch
and 30 bags of brown mulch.

How many bags of mulch does
Lucy have for her garden?


- Objects/Tools
- Picture
- Equation
- Mental Math
- Counting On
- Counting Back
- Make a 10
- Back Down Through 10
- Think Addition
- Fact
- Count All
- Doubles + 1 or 2
- Doubles - 1 or 2



C.U.B.E.S

Mrs. Mack saw 50 bumble bees and 42 ladybugs. How many bugs did Mrs. Mack see?

- Objects/Tools
- Picture
- Equation
- Mental Math
- Counting On
- Counting Back
- Make a 10
- Back Down Through 10
- Think Addition
- Fact
- Count All
- Doubles + 1 or 2
- Doubles - 1 or 2



C.U.B.E.S

Jenny saw 40 frog tadpoles and 43 toad tadpoles. How many tadpoles did Jenny see?

- Objects/Tools
- Picture
- Equation
- Mental Math
- Counting On
- Counting Back
- Make a 10
- Back Down Through 10
- Think Addition
- Fact
- Count All
- Doubles + 1 or 2
- Doubles - 1 or 2



C.U.B.E.S

Kayla picks 10 daffodils and 32 lilies for her bouquet. How many flowers does she have in her bouquet?

- Objects/Tools
- Picture
- Equation
- Mental Math
- Counting On
- Counting Back
- Make a 10
- Back Down Through 10
- Think Addition
- Fact
- Count All
- Doubles + 1 or 2
- Doubles - 1 or 2



C.U.B.E.S

At the pond, 24 robins hatched
and 60 hummingbirds hatched.
How many birds hatched at the
pond?

- Objects/Tools
- Picture
- Equation
- Mental Math
- Counting On
- Counting Back
- Make a 10
- Back Down Through 10
- Think Addition
- Fact
- Count All
- Doubles + 1 or 2
- Doubles - 1 or 2



C.U.B.E.S

Mr. Lee planted 45 pepper plants and 7 tomato plants. How many vegetable plants does Mr. Lee have in his garden?

- Objects/Tools
- Picture
- Equation
- Mental Math
- Counting On
- Counting Back
- Make a 10
- Back Down Through 10
- Think Addition
- Fact
- Count All
- Doubles + 1 or 2
- Doubles - 1 or 2



C.U.B.E.S

Amir saw 18 striped umbrellas
and 5 polka-dotted umbrellas.

How many umbrellas did he see?


- Objects/Tools
- Picture
- Equation
- Mental Math
- Counting On
- Counting Back
- Make a 10
- Back Down Through 10
- Think Addition
- Fact
- Count All
- Doubles + 1 or 2
- Doubles - 1 or 2



C.U.B.E.S

Lucy saw 23 brown rabbits and 4 white rabbits. How many rabbits did Lucy see?

- Objects/Tools
- Picture
- Equation
- Mental Math
- Counting On
- Counting Back
- Make a 10
- Back Down Through 10
- Think Addition
- Fact
- Count All
- Doubles + 1 or 2
- Doubles - 1 or 2



C.U.B.E.S

For Spring Break, 35 people went to Virginia Beach and 9 people went to Myrtle Beach. How many people went to the beach for Spring Break?

- Objects/Tools
- Picture
- Equation
- Mental Math
- Counting On
- Counting Back
- Make a 10
- Back Down Through 10
- Think Addition
- Fact
- Count All
- Doubles + 1 or 2
- Doubles - 1 or 2



C.U.B.E.S

Micah bought 6 bags of flower seeds and 13 bags of vegetable seeds. How many bags of seeds did he buy?

- Objects/Tools
- Picture
- Equation
- Mental Math
- Counting On
- Counting Back
- Make a 10
- Back Down Through 10
- Think Addition
- Fact
- Count All
- Doubles + 1 or 2
- Doubles - 1 or 2



C.U.B.E.S

For Earth Day you recycle 8 bags of aluminum cans and 56 bags of plastic bottles. How many bags of recycling do you have?

- Objects/Tools
- Picture
- Equation
- Mental Math
- Counting On
- Counting Back
- Make a 10
- Back Down Through 10
- Think Addition
- Fact
- Count All
- Doubles + 1 or 2
- Doubles - 1 or 2



C.U.B.E.S

In March there were 7 rainy days.

In April there were 13 rainy days.

How many days did it rain in
March and April?


- Objects/Tools
- Picture
- Equation
- Mental Math
- Counting On
- Counting Back
- Make a 10
- Back Down Through 10
- Think Addition
- Fact
- Count All
- Doubles + 1 or 2
- Doubles - 1 or 2



C.U.B.E.S

Kelly bought 8 white plants and 26 black plants. How many plants did Kelly buy?

- Objects/Tools
- Picture
- Equation
- Mental Math
- Counting On
- Counting Back
- Make a 10
- Back Down Through 10
- Think Addition
- Fact
- Count All
- Doubles + 1 or 2
- Doubles - 1 or 2



C.U.B.E.S

Captain Blackbeard had 40 gold pieces under his hat. He had 60 more gold pieces in his treasure chest. How many gold pieces did Captain Blackbeard have?

- Objects/Tools
- Picture
- Equation
- Mental Math
- Counting On
- Counting Back
- Make a 10
- Back Down Through 10
- Think Addition
- Fact
- Count All
- Doubles + 1 or 2
- Doubles - 1 or 2



C.U.B.E.S

Righty the Pirate had 29 red gems and 6 blue gems. How many gems did Righty the Pirate have?

- Objects/Tools
- Picture
- Equation
- Mental Math
- Counting On
- Counting Back
- Make a 10
- Back Down Through 10
- Think Addition
- Fact
- Count All
- Doubles + 1 or 2
- Doubles - 1 or 2



C.U.B.E.S

Whitehair the Pirate has 10 bags of gold coins and 40 silver coins.
How many bags of money does Whitehair the Pirate have?

- Objects/Tools
- Picture
- Equation
- Mental Math
- Counting On
- Counting Back
- Make a 10
- Back Down Through 10
- Think Addition
- Fact
- Count All
- Doubles + 1 or 2
- Doubles - 1 or 2



C.U.B.E.S

First Mate Jax scrubbed 26
brown boots and 8 black boots.
How many boots did First Mate
Jax clean?


- Objects/Tools
- Picture
- Equation
- Mental Math
- Counting On
- Counting Back
- Make a 10
- Back Down Through 10
- Think Addition
- Fact
- Count All
- Doubles + 1 or 2
- Doubles - 1 or 2



C.U.B.E.S

Captain Strong Arm has 20 pearl necklaces and 70 diamond necklaces. How many necklaces does Captain Strong Arm have?


- Objects/Tools
- Picture
- Equation
- Mental Math
- Counting On
- Counting Back
- Make a 10
- Back Down Through 10
- Think Addition
- Fact
- Count All
- Doubles + 1 or 2
- Doubles - 1 or 2



C.U.B.E.S

On the Jolly Roger there are 32 male crew members and 5 female crew members. How many crew members are on the Jolly Roger?


- Objects/Tools
- Picture
- Equation
- Mental Math
- Counting On
- Counting Back
- Make a 10
- Back Down Through 10
- Think Addition
- Fact
- Count All
- Doubles + 1 or 2
- Doubles - 1 or 2



C.U.B.E.S

The pirate crew eats 30 barrels of pickles and 60 barrels of oranges. How many barrels of food does the pirate crew eat?

- Objects/Tools
- Picture
- Equation
- Mental Math
- Counting On
- Counting Back
- Make a 10
- Back Down Through 10
- Think Addition
- Fact
- Count All
- Doubles + 1 or 2
- Doubles - 1 or 2



C.U.B.E.S

Shorty the Peg Leg Pirate uses 59 pieces of wood and 7 pieces of metal to make a treasure chest. How much material does Shorty use to make a treasure chest?

- Objects/Tools
- Picture
- Equation
- Mental Math
- Counting On
- Counting Back
- Make a 10
- Back Down Through 10
- Think Addition
- Fact
- Count All
- Doubles + 1 or 2
- Doubles - 1 or 2



C.U.B.E.S

Yellowbeard the Pirate packs 50 packs of crackers and 50 packs of seeds for his parrot. How many packs of food does Yellowbeard have for his parrot?


- Objects/Tools
- Picture
- Equation
- Mental Math
- Counting On
- Counting Back
- Make a 10
- Back Down Through 10
- Think Addition
- Fact
- Count All
- Doubles + 1 or 2
- Doubles - 1 or 2



C.U.B.E.S

Captain Misty sees 45 fish and 3 dolphins in the ocean. How many animals does Misty see?


- Objects/Tools
- Picture
- Equation
- Mental Math
- Counting On
- Counting Back
- Make a 10
- Back Down Through 10
- Think Addition
- Fact
- Count All
- Doubles + 1 or 2
- Doubles - 1 or 2



C.U.B.E.S

Aunt Sarah peeled 25 pears and 9 apples. How many pieces of fruit did she peel?


- Objects/Tools
- Picture
- Equation
- Mental Math
- Counting On
- Counting Back
- Make a 10
- Back Down Through 10
- Think Addition
- Fact
- Count All
- Doubles + 1 or 2
- Doubles - 1 or 2



C.U.B.E.S

Uncle David picked 50 blueberries and 40 peaches. How many pieces of fruit did he pick?


- Objects/Tools
- Picture
- Equation
- Mental Math
- Counting On
- Counting Back
- Make a 10
- Back Down Through 10
- Think Addition
- Fact
- Count All
- Doubles + 1 or 2
- Doubles - 1 or 2



C.U.B.E.S

Aunt Sarah and Uncle David planted 20 lime trees and 20 peach trees. How many trees did they plant?

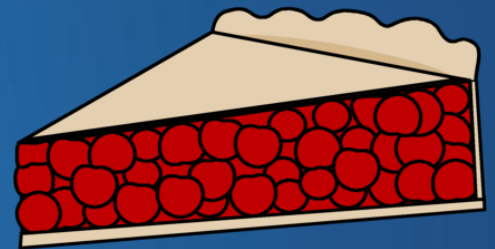
- Objects/Tools
- Picture
- Equation
- Mental Math
- Counting On
- Counting Back
- Make a 10
- Back Down Through 10
- Think Addition
- Fact
- Count All
- Doubles + 1 or 2
- Doubles - 1 or 2



C.U.B.E.S

Aunt Sarah made 13 apple pies and 8 cherry pies. How many pies did she make?


- Objects/Tools
- Picture
- Equation
- Mental Math
- Counting On
- Counting Back
- Make a 10
- Back Down Through 10
- Think Addition
- Fact
- Count All
- Doubles + 1 or 2
- Doubles - 1 or 2



C.U.B.E.S

Uncle Dave watered 10 lemon trees and 70 apple trees. How many trees did Uncle David water?

- Objects/Tools
- Picture
- Equation
- Mental Math
- Counting On
- Counting Back
- Make a 10
- Back Down Through 10
- Think Addition
- Fact
- Count All
- Doubles + 1 or 2
- Doubles - 1 or 2



C.U.B.E.S

Aunt Sarah and Uncle David sold 64 bananas and 4 apples. How many pieces of fruit did they sell?

- Objects/Tools
- Picture
- Equation
- Mental Math
- Counting On
- Counting Back
- Make a 10
- Back Down Through 10
- Think Addition
- Fact
- Count All
- Doubles + 1 or 2
- Doubles - 1 or 2



C.U.B.E.S

Jenna used 20 clam shells and 50 snail shells for her necklace. How many shells are on her necklace?

- Objects/Tools
- Picture
- Equation
- Mental Math
- Counting On
- Counting Back
- Make a 10
- Back Down Through 10
- Think Addition
- Fact
- Count All
- Doubles + 1 or 2
- Doubles - 1 or 2




C.U.B.E.S

Ethan collected 40 shells and his sister Elizabeth collected 30 shells.

How many shells did they collect altogether?


- Objects/Tools
- Picture
- Equation
- Mental Math
- Counting On
- Counting Back
- Make a 10
- Back Down Through 10
- Think Addition
- Fact
- Count All
- Doubles + 1 or 2
- Doubles - 1 or 2



C.U.B.E.S

Taylor painted her shells green and silver. She painted 40 shells silver and 50 of her shells green. How many shells did Taylor paint?


- Objects/Tools
- Picture
- Equation
- Mental Math
- Counting On
- Counting Back
- Make a 10
- Back Down Through 10
- Think Addition
- Fact
- Count All
- Doubles + 1 or 2
- Doubles - 1 or 2



C.U.B.E.S

Aunt Sarah made 40 batches of peach jelly and 52 batches of grape jelly. How many batches of jelly did Aunt Sarah make?


- Objects/Tools
- Picture
- Equation
- Mental Math
- Counting On
- Counting Back
- Make a 10
- Back Down Through 10
- Think Addition
- Fact
- Count All
- Doubles + 1 or 2
- Doubles - 1 or 2



C.U.B.E.S

10 worms were sitting on the grass. Some more crawled over. Now there are 18 worms. How many worms crawled over?

- Objects/Tools
- Picture
- Equation
- Mental Math
- Counting On
- Counting Back
- Make a 10
- Back Down Through 10
- Think Addition
- Fact
- Count All
- Doubles + 1 or 2
- Doubles - 1 or 2



C.U.B.E.S

12 bugs were on a leaf. 5 were red and the rest are green. How many are green?

- Objects/Tools
- Picture
- Equation
- Mental Math
- Counting On
- Counting Back
- Make a 10
- Back Down Through 10
- Think Addition
- Fact
- Count All
- Doubles + 1 or 2
- Doubles - 1 or 2



C.U.B.E.S

Jake has 9 sticks. Mike has 8 sticks. How many more sticks does Jake have than Mike?

- Objects/Tools
- Picture
- Equation
- Mental Math
- Counting On
- Counting Back
- Make a 10
- Back Down Through 10
- Think Addition
- Fact
- Count All
- Doubles + 1 or 2
- Doubles - 1 or 2



C.U.B.E.S

12 leaves were on the grass.
Some more blew there. Then
there were 19 leaves. How many
leaves blew over to the first 12?

- Objects/Tools
- Picture
- Equation
- Mental Math
- Counting On
- Counting Back
- Make a 10
- Back Down Through 10
- Think Addition
- Fact
- Count All
- Doubles + 1 or 2
- Doubles - 1 or 2



C.U.B.E.S

13 birds were in the tree. Some flew away. Then there 6 birds.
How many birds flew away?

- Objects/Tools
- Picture
- Equation
- Mental Math
- Counting On
- Counting Back
- Make a 10
- Back Down Through 10
- Think Addition
- Fact
- Count All
- Doubles + 1 or 2
- Doubles - 1 or 2



C.U.B.E.S

Meg has 8 more sticks than Dan.
Dan has 5 sticks. How many
sticks does Meg have?


- Objects/Tools
- Picture
- Equation
- Mental Math
- Counting On
- Counting Back
- Make a 10
- Back Down Through 10
- Think Addition
- Fact
- Count All
- Doubles + 1 or 2
- Doubles - 1 or 2



C.U.B.E.S

2 bugs were on the grass. Some more went there. Then there were 15 bugs. How many bugs went over to the first 2?


- Objects/Tools
- Picture
- Equation
- Mental Math
- Counting On
- Counting Back
- Make a 10
- Back Down Through 10
- Think Addition
- Fact
- Count All
- Doubles + 1 or 2
- Doubles - 1 or 2



C.U.B.E.S

9 rocks were by the tent. Some rolled away. Then there were 7 rocks. How many rocks rolled away?

- Objects/Tools
- Picture
- Equation
- Mental Math
- Counting On
- Counting Back
- Make a 10
- Back Down Through 10
- Think Addition
- Fact
- Count All
- Doubles + 1 or 2
- Doubles - 1 or 2



C.U.B.E.S

16 blue birds were in the tree.

There were 8 red birds in the tree too. How many more red birds are in the tree?


- Objects/Tools
- Picture
- Equation
- Mental Math
- Counting On
- Counting Back
- Make a 10
- Back Down Through 10
- Think Addition
- Fact
- Count All
- Doubles + 1 or 2
- Doubles - 1 or 2



C.U.B.E.S

Dan has 3 fewer fish than Tom.
Tom has 13 fish. How many fish
does Dan have?

- Objects/Tools
- Picture
- Equation
- Mental Math
- Counting On
- Counting Back
- Make a 10
- Back Down Through 10
- Think Addition
- Fact
- Count All
- Doubles + 1 or 2
- Doubles - 1 or 2



C.U.B.E.S

14 apples were on the tree. Mac picked some apples. Then there were 7 apples. How many apples did Mac pick?

- Objects/Tools
- Picture
- Equation
- Mental Math
- Counting On
- Counting Back
- Make a 10
- Back Down Through 10
- Think Addition
- Fact
- Count All
- Doubles + 1 or 2
- Doubles - 1 or 2



C.U.B.E.S

13 owls were in the tree. 7 were brown the rest were black. How many are black?

- Objects/Tools
- Picture
- Equation
- Mental Math
- Counting On
- Counting Back
- Make a 10
- Back Down Through 10
- Think Addition
- Fact
- Count All
- Doubles + 1 or 2
- Doubles - 1 or 2



C.U.B.E.S

Tom has 3 fewer pine cones than Meg. Meg has 14 pine cones. How many pine cones does Tom have?


- Objects/Tools
- Picture
- Equation
- Mental Math
- Counting On
- Counting Back
- Make a 10
- Back Down Through 10
- Think Addition
- Fact
- Count All
- Doubles + 1 or 2
- Doubles - 1 or 2



C.U.B.E.S

Bob has 5 more worms than Tom. Tom has 3 worms. How many worms does Bob have?


- Objects/Tools
- Picture
- Equation
- Mental Math
- Counting On
- Counting Back
- Make a 10
- Back Down Through 10
- Think Addition
- Fact
- Count All
- Doubles + 1 or 2
- Doubles - 1 or 2



C.U.B.E.S

Kat has 10 more fish than Nick.
Nick has 5 fish. How many fish
does Kat have?

- Objects/Tools
- Picture
- Equation
- Mental Math
- Counting On
- Counting Back
- Make a 10
- Back Down Through 10
- Think Addition
- Fact
- Count All
- Doubles + 1 or 2
- Doubles - 1 or 2



C.U.B.E.S

Pam has 8 more snacks than Mat. Mat has 4 snacks. How many snacks does Pam have?

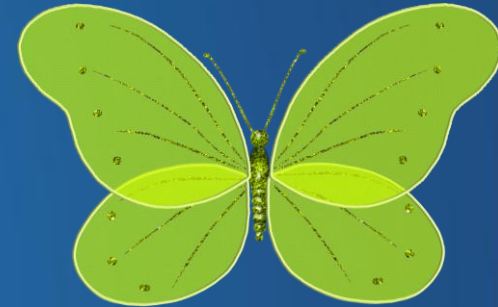
- Objects/Tools
- Picture
- Equation
- Mental Math
- Counting On
- Counting Back
- Make a 10
- Back Down Through 10
- Think Addition
- Fact
- Count All
- Doubles + 1 or 2
- Doubles - 1 or 2



C.U.B.E.S

Dan has 6 more butterflies than Mary. Mary has 10 butterflies. How many butterflies does Dan have?

- Objects/Tools
- Picture
- Equation
- Mental Math
- Counting On
- Counting Back
- Make a 10
- Back Down Through 10
- Think Addition
- Fact
- Count All
- Doubles + 1 or 2
- Doubles - 1 or 2



C.U.B.E.S

Mitt has 7 more acorns than Bob.
Bob has 8 acorns. How many
acorns does Mitt have?


- Objects/Tools
- Picture
- Equation
- Mental Math
- Counting On
- Counting Back
- Make a 10
- Back Down Through 10
- Think Addition
- Fact
- Count All
- Doubles + 1 or 2
- Doubles - 1 or 2



C.U.B.E.S

Mike has 9 more spiders than Britt. Britt has 9 spiders. How many spiders does Mike have?


- Objects/Tools
- Picture
- Equation
- Mental Math
- Counting On
- Counting Back
- Make a 10
- Back Down Through 10
- Think Addition
- Fact
- Count All
- Doubles + 1 or 2
- Doubles - 1 or 2



C.U.B.E.S

Meg has 9 more leaves than Pam.
Pam has 5 leaves. How many
leaves does Meg have?


- Objects/Tools
- Picture
- Equation
- Mental Math
- Counting On
- Counting Back
- Make a 10
- Back Down Through 10
- Think Addition
- Fact
- Count All
- Doubles + 1 or 2
- Doubles - 1 or 2



C.U.B.E.S

Dan has 7 more books than Jan.
Jan has 6 books. How many
books does Dan have?

- Objects/Tools
- Picture
- Equation
- Mental Math
- Counting On
- Counting Back
- Make a 10
- Back Down Through 10
- Think Addition
- Fact
- Count All
- Doubles + 1 or 2
- Doubles - 1 or 2



C.U.B.E.S

Will has 4 more crabs than Tom.
Tom has 6 crabs. How many
crabs does Will have?

- Objects/Tools
- Picture
- Equation
- Mental Math
- Counting On
- Counting Back
- Make a 10
- Back Down Through 10
- Think Addition
- Fact
- Count All
- Doubles + 1 or 2
- Doubles - 1 or 2

